







# Note Values Worksheet


1. Fill in the blanks with the correct number.

a) It takes \_\_\_\_\_ quarter notes  to equal the length of one half note 

b) It takes \_\_\_\_\_ half notes  to equal the length of one whole note 

c) It takes \_\_\_\_\_ quarter notes  to equal the length of one whole note 

2. Indicate if the stem should go up or down by using U for up and D for down. The first one is done for you.




U    \_    \_    \_    \_    \_    \_    \_    D    \_    \_    \_    \_    \_

3. Look at the clef sign, then name the notes to spell a word. The first one is done for you.



B    E    E    \_    \_    \_    \_    \_    \_    \_    \_    \_    \_



A    C    E    \_    \_    \_    \_    \_    \_    \_    \_    \_